






CE2 Numération

Écris la multiplication qui dit combien il y a de groupes de 10 billes et combien de billes en tout.

Fiche 1



CE2 Numération

Écris la multiplication qui dit combien il y a de groupes de 10 billes et combien de billes en tout.

Fiche 2

